

Azaan International School

Activity sheet IV (2019-20)

Grade - I

Sec: _____

Subject- English

Name: _____

Date: _____

Lesson -10 White lily.

I. Write the rhyming words for the following words.

a. till _____

b. rain _____

c. sat _____

d. feet _____

II. Match the opposites.



happy




wet



black



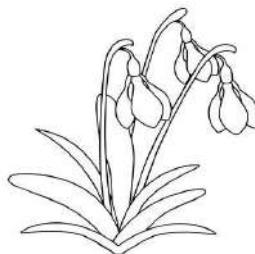
blooming




dry



sad



drooping



white

III. Match the things that you do at morning, in evening and at night.

1.



a. Morning

2.



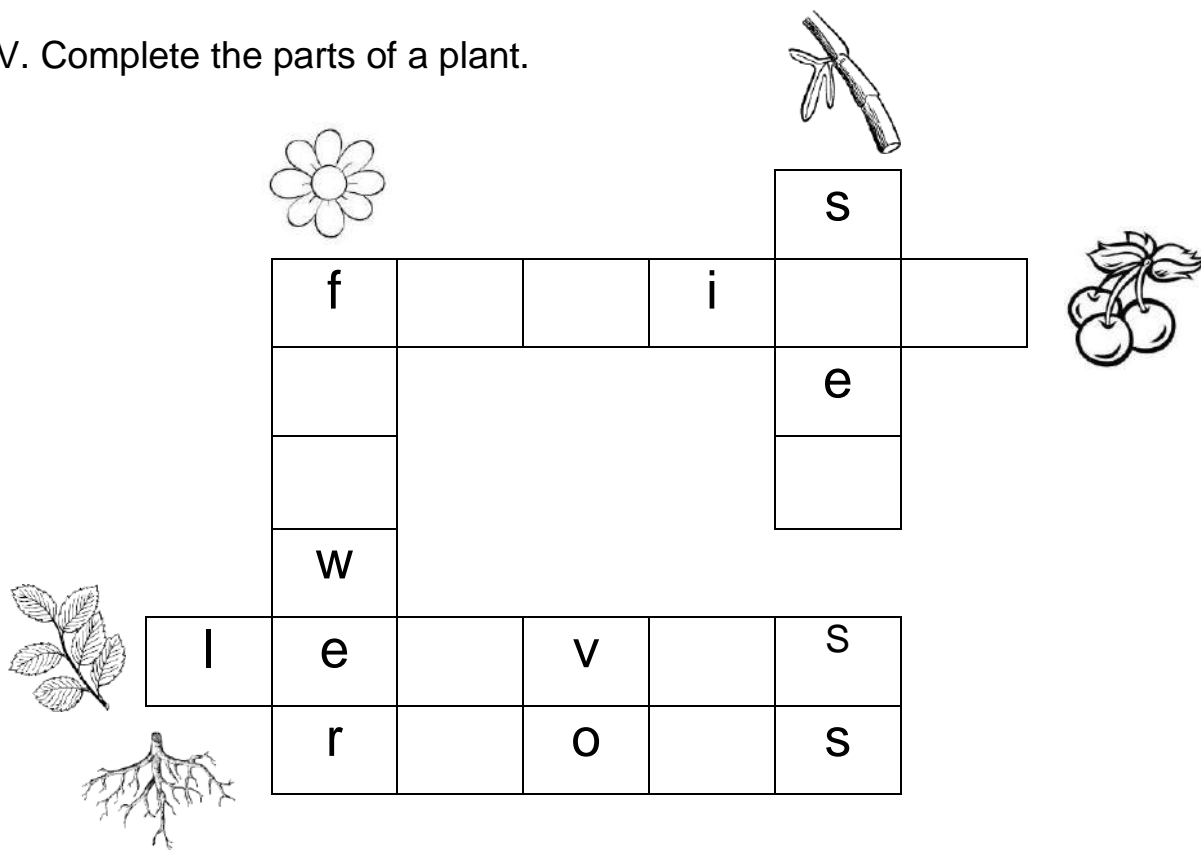
b. Night

3.



c. Evening

IV. Complete the parts of a plant.



Azaan International School

Activity sheet IV (2019-20)

Grade - I

Sec: _____

Subject-E.V.S

Name: _____

Date: _____

Lesson- 14 Places In Our Neighborhood.

I. Choose the correct answer.

1. A doctor treats the sick in the ()
a. Hospital b. bank c. school.
2. The people who work in fire station are ()
a. Tailor b. policeman c. firefighters
3. We go to school to ()
a. Keep money b. study c. post letters.
4. A bus stop is to catch a ()
a. Bus b. train c. aero plane.
5. A bank is a place where we go to ()
a. Keep money b. post letters c. buy vegetable

II. Write 'T' for true and 'F' for false.

1. We should not keep our neighborhood clean. ()
2. We go to post office to buy stamps and envelops. ()
3. A policeman works in the fire station. ()
4. The train stops at railway station. ()
5. We go to saloon to style our hair. ()

III. Draw the picture of a park and color it.



Azaan International School

Activity sheet IV (2019-20)

Grade - I

Sec: _____

Subject-Hindi

Name: _____

Date: _____

I. नीचे दिए गए रिक्त स्थान की पूर्ती कीजिए -

ट _____ ण

त _____ न


प _____ म


य _____ श _____


क्ष _____

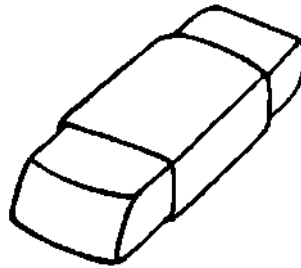
II. नीचे दिए गए चित्र को पहचान कर उसके नाम का पहला वर्ण लिखिए














III.नीचे दिए गए स्थान पर दो अक्षर वाले शब्द लिखिए -

१. _____

२. _____

३. _____

४. _____

IV.नीचे दिए गए स्थान पर तीन अक्षर वाले शब्द लिखिए -

१. _____

२. _____

३. _____

४. _____

Azaan International School

Activity sheet IV (2019-20)

Grade - I

Sec: _____

Subject-Math


Name: _____

Date: _____

Lesson-12 Measuring Length

1. Tick the object s which are shorter.

a.



b.



c.




2. How long is each object?


a.



The pencil is _____ paper clips long.



The toothbrush is _____ erasers long.



The book is _____ erasers long.


3. Fill in the blanks.

- The eraser is _____ than pencil. [longer/ shorter]
- The length of a duster is measured by _____. [Paperclip/ ball]
- The hand span is used to measure _____. [Length/weight]
- The elephant has _____trunk. [shorter/longer]

4. Use hand span to measure the length of the following objects .Write first estimated length and then write actual length measured.

Object	Estimate length	Exact length in hand span
1.window		
2.door		
3.table		

5. Find how many blocks long is each ice cream cone?



Azaan International School

Activity sheet IV (2019-20)

Grade - I

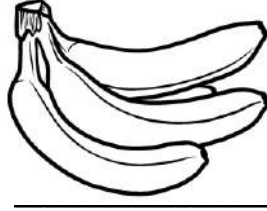


Sec: _____

Subject- Urdu

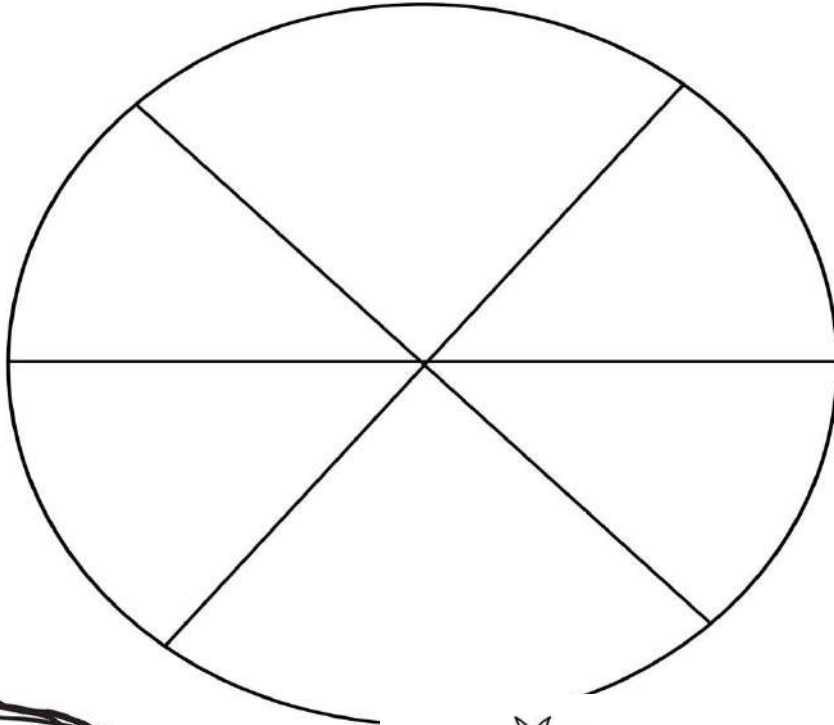
Name: _____

Date: _____


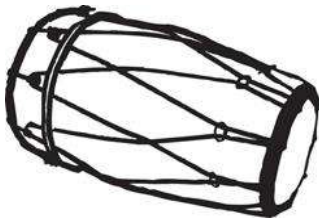
I- پھلوں کے نام لکھیے:-



II- حروف کو جوڑ کر لفظ بنائیے:-



III- تصویر دی



IV- تین حرفی الفاظ لکھیے:-

